



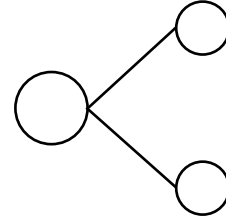
NAME _____

DATE _____

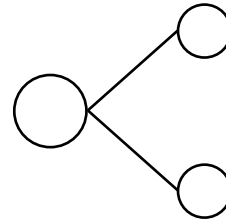
SUBTRACTIONS (USING 9)

Draw and round 9. Solve and make a number bond.

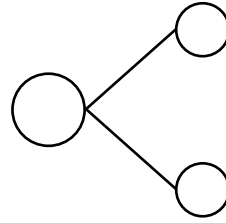
a) $13 - 9 = \underline{\quad}$.



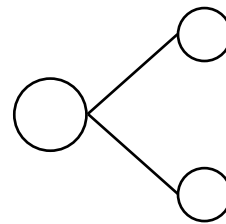
b) $17 - 9 = \underline{\quad}$.



c) $15 - 9 = \underline{\quad}$.



d) $11 - 9 = \underline{\quad}$.



e) $12 - 9 = \underline{\quad}$.

